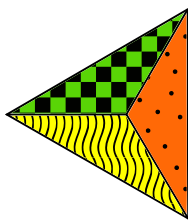





# Triantáin



Ba mhaith le Bríd mósáic a chruthú le tileanna comhionanna a bhfuil cruth an triantáin orthu. Tosaíonn sí le tíl amháin. Casann sí í ar deiseal 90 céim agus ansin cuireann sí tileanna léi a thagann le gach taobh den tíl rothlaithe, mar a léirítear sa pictiúr thíos. Ansin, casann sí an cruth iomlán 90 céim ar deiseal arís agus cuireann sí tileanna leis a thagann le gach taobh den chruth rothlaithe.



Céim 1



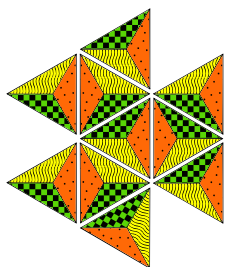
Céim 2



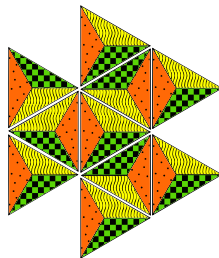
Céim 3

## CEIST

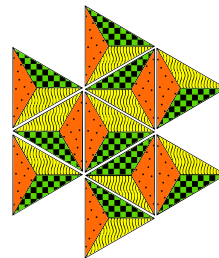
Cad í an mhósáic cheart i ndiaidh chéim 3?



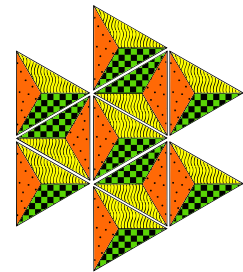
A.



B.



C.



D.

Computational thinking resources for teachers by Maynooth University – [pact.cs.nuim.ie](http://pact.cs.nuim.ie)  
Original © 2016 Bebras, modifications © 2020 Maynooth University, Licence: CC-BY-NC-SA 4.0  
Aistriúchán Gaeilge arna mhaoiniú ag COGG

