



# Parade planning



















Jenny and Paul are organising the Saint Patrick's Day parade for the village. They want to have a good mix of dancers (labelled R in the pictures) and marching bands (labelled M in the pictures). They decide to make the following rules:









1. The parade must start with a Garda car (G).
2. There must not be two marching bands or two sets of dancers next to each other.
3. Saint Patrick (P) must be followed immediately by a marching band.
4. A marching band should not follow directly behind a Garda car.
5. The parade must have a fire engine (F) or an ambulance (E) or both.









## QUESTION

Which picture follows the rules for the parade?

A.          
G R M P R M R F

B.          
G M R E F R P M

C.          
G R M F R P M R

D.          
G F R R P M E R

