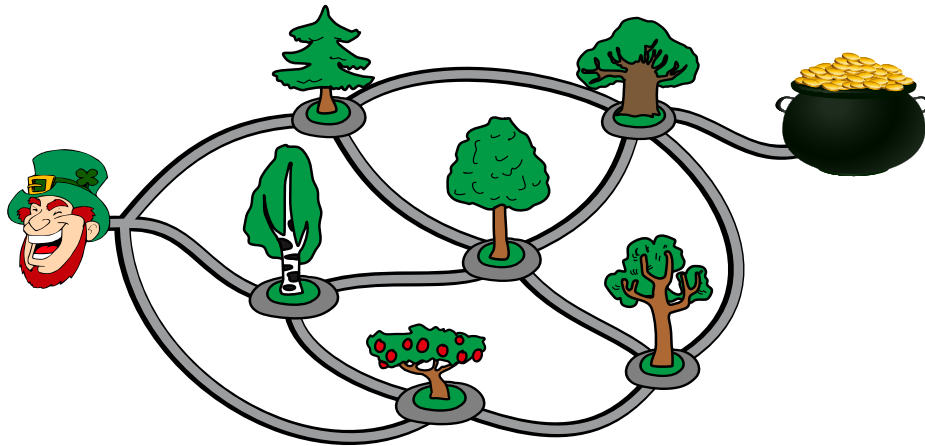




























# Trail to the pot of gold

In between a leprechaun and his pot of gold there are some trails, where each intersection is marked with a different tree. The leprechaun finds his pot of gold using these trails passing exactly four intersections along the way.



## QUESTION

In which order could the leprechaun have passed these intersections?

- A.  —  —  —  —  — 
- B.  —  —  —  —  — 
- C.  —  —  —  —  — 
- D.  —  —  —  —  — 

Computational thinking resources for teachers by Maynooth University – [pact.cs.nuim.ie](http://pact.cs.nuim.ie)  
Original © 2022 Bebras, modifications © 2025 Maynooth University, Licence: CC-BY-NC-SA 4.0

