







Valentine's flowers



The flower shop sells four types of flowers:

			
gladiolus	lily	tulip	rose

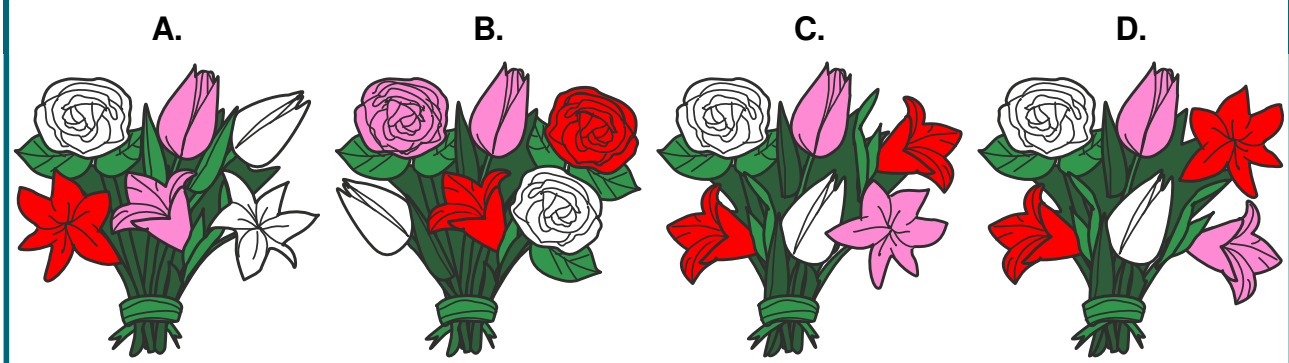
Each flower is available in three colours: white, red, and pink

Eoghan would like to buy a bunch of six flowers for Valentine's Day with these rules:

- 1) each of the colours white, red, and pink should occur exactly twice,
- 2) flowers of the same type should not have the same colour,
- 3) there should be at least one flower of each type.

QUESTION

Which bunch of flowers should Eoghan buy?



Computational thinking resources for teachers by Maynooth University – pact.cs.nuim.ie
Original © 2018 Bebras, modifications © 2020 Maynooth University, Licence: CC-BY-NC-SA 4.0

