



# Heaviest gem





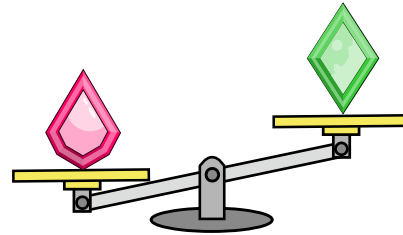
Simon enters a jewellers which sells five different gems.

Simon wants to buy the heaviest gem available to give as a gift for Valentine's Day.

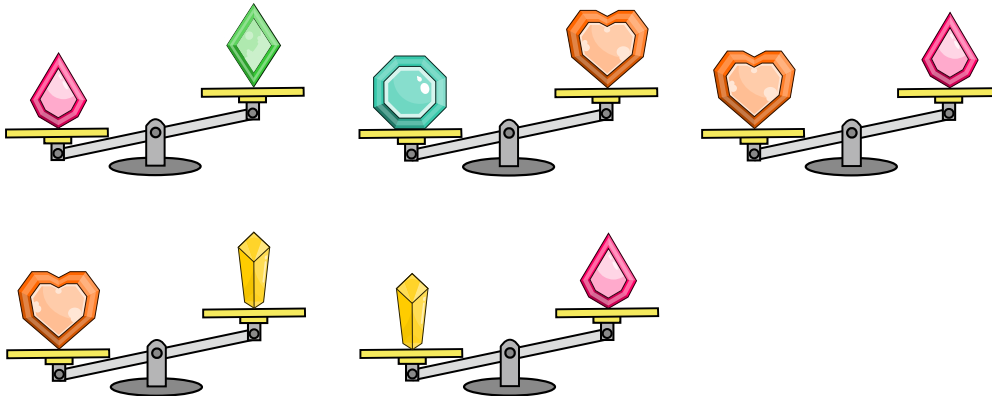
Using a balance scales, Simon can compare the weights of two different gems.

For example, the diagram to the right shows

that the  gem is lighter than the  gem.



Simon makes the following five comparisons to find which gem to buy:



## QUESTION

Which gem should Simon buy?



A.



B.



C.



D.



E.

