



# Valentine's sugar shapes




Isabelle fills a box with different sugar shapes for her friends to share on Valentine's Day. The box has nine sections. She follows these rules:

- each row has one of each shape;
- each column has one of each shape.


## QUESTION

Which box did Isabelle fill?


A.



B.



C.



D.

